




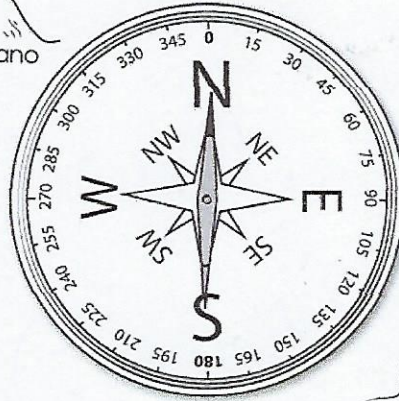

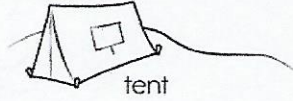
Name: _____

I did page 1 edHelper

MAGNETS!

Which direction would you travel to reach each landmark?

*The north pole is magnetized, which attracts the magnet on a compass needle. It will always point north.



- NE tent
- _____ cabin
- _____ waterfall
- _____ mountains
- _____ lake
- _____ volcano
- _____ forest
- _____ butte

Which item is the magnet most likely to attract?

