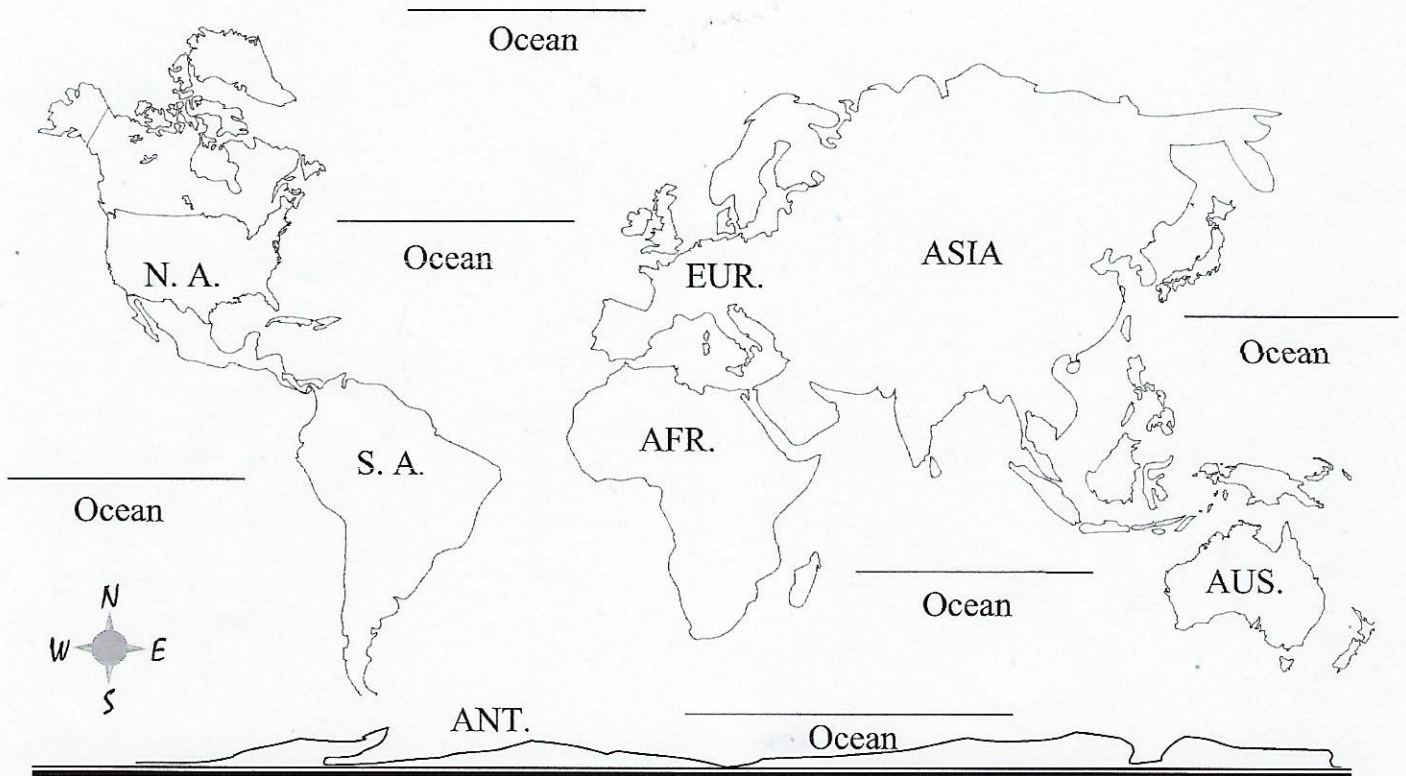




THE ABBREVIATED EARTH

Name _____

Date _____



1. Write the full names for the abbreviations used on this map.

- N.A. is _____
- S.A. is _____
- AFR. is _____
- AUS. is _____
- EUR. is _____
- ANT. is _____

2. On the map, fill in the names of the oceans, using their full names. (One will be written twice.)

3. Which two continents are considered the Western Hemisphere? _____

4. Which continent is the largest in the Eastern Hemisphere? _____

Which continent in the Eastern Hemisphere does not border the other continents?

5. The United States is on which **continent**? _____

Which of the two mentioned **hemispheres** is the United States in? _____

6. Lightly color as follows: **Western Hemisphere** - green **Eastern Hemisphere** - orange

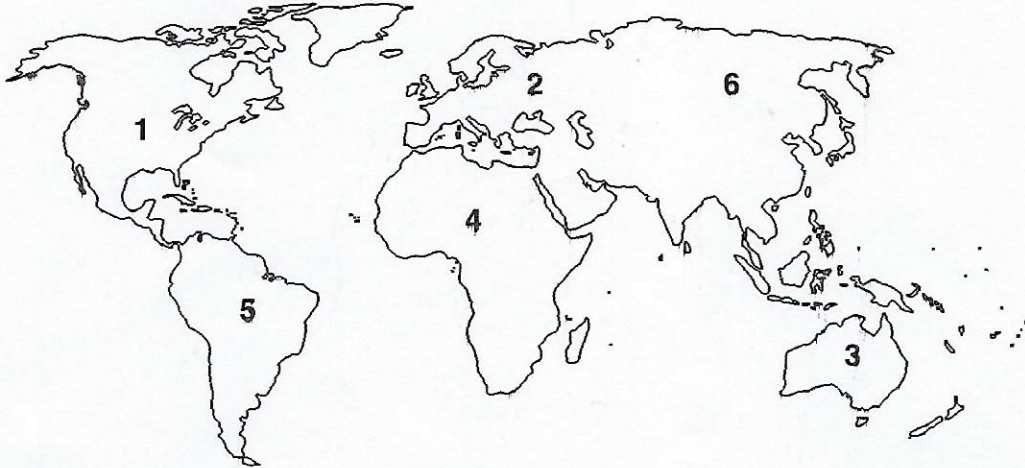
World Geography Pre/Post Assessment

Name: _____

Date: _____

Directions: Attempt ALL questions. The questions are equally weighted unless otherwise stated. Carefully read and follow directions to each of the questions.

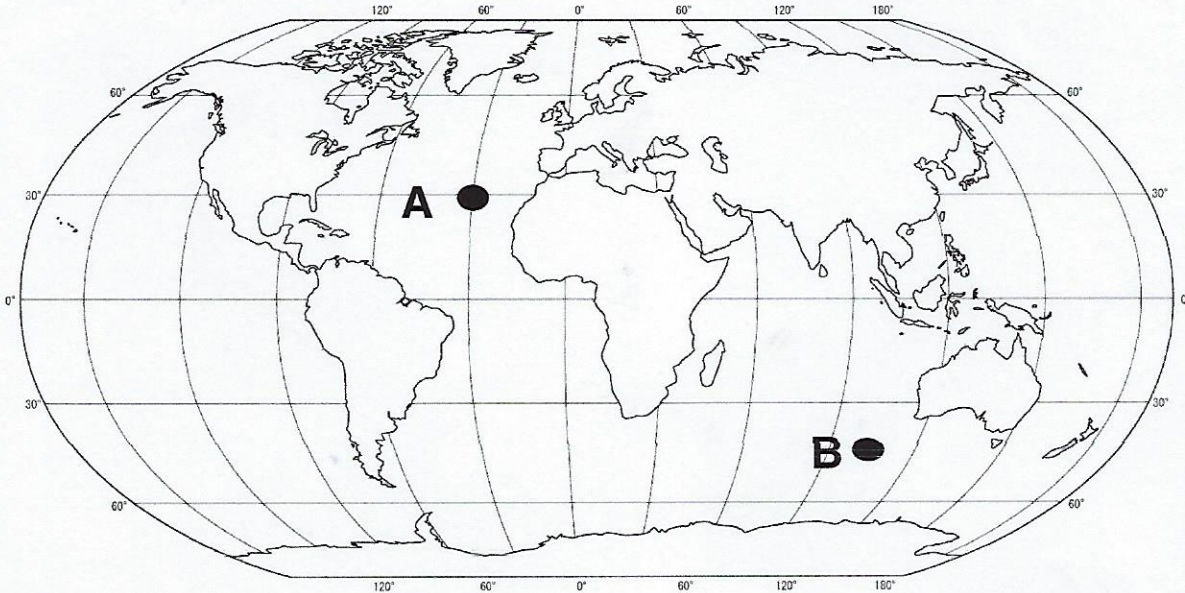
1. Using the following map, identify each of the continents by placing the correct number next to each continent.



Africa _____ South America _____

Australia _____ Europe _____

2. Using the maps below, identify the latitude and longitude of points A & B and write your answer next to each question.



A: _____ Latitude _____ Longitude _____

B: _____ Latitude _____ Longitude _____

C. What direction would you be traveling if you were to travel from point A to point B?

(i.e. Northeast, Northwest, Southeast, Southwest) _____

3. Identify the countries. Match the numbers to the countries below. Place the correct number next to each country.



United States: _____

Russia: _____

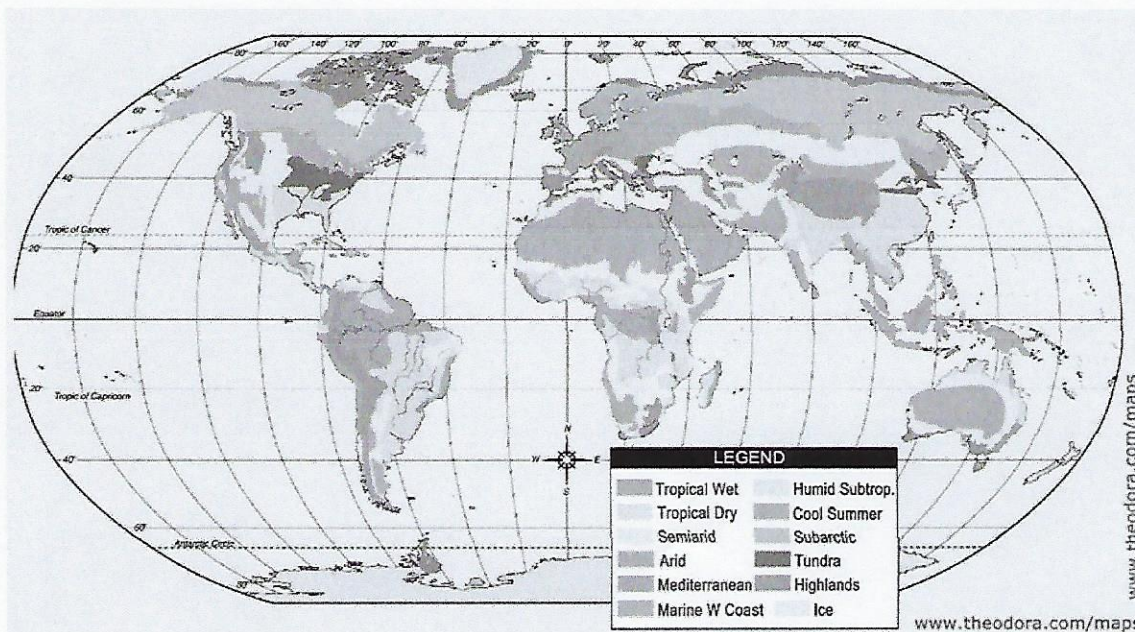
Egypt: _____

Brazil _____

China: _____

Germany: _____

4. Map Skills: Use the map below to answer each of the following questions.



What type of map is this? _____

According to this map, what climate is most often seen in the north-western hemisphere? _____

What are the climate types of Northern Africa? _____

Which climate is least often seen throughout the world? _____