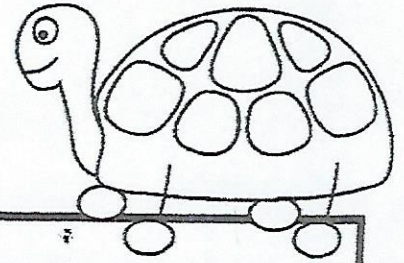


Name _____

Day 1

Directions: Read the text 3 times. Color a star after each time you read.

The Big Turtle



I found a big turtle in my garden. It had a grey hard shell on its body. I did not know what to do with the turtle. I asked my dad to help me. Dad said not to touch it. It was a mother turtle looking for a nest.

Answer the questions and color the evidence in the text.


1. Where did I find the turtle?



in my yard

in my garden


2. What color was the turtle's shell?



grey

brown

3. Why did Dad say not to touch the turtle?



Name _____

Day 1

Weekly Question

Can a rock grow?

Daily Science




Big Idea 1



WEEK 1

Some things grow, and some things do not.

1. What do you think can grow?
Circle your guesses.



Vocabulary

grow
to get bigger

2. Complete the sentence. Write the word.

Some things

--	--	--	--


.

3. What grows and changes at your home?
Write the word. Draw a picture of it.

Name _____

Day 1

What do you think about the weather today?

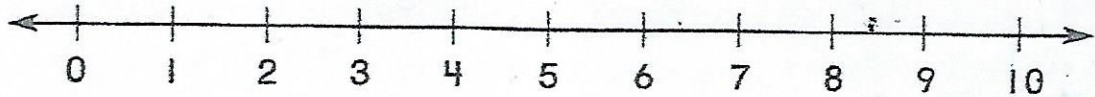


Handwriting practice lines consisting of solid top and bottom lines with a dashed middle line. There are 10 sets of these lines provided for writing the answer to the question above.

Use a Number Line to Count On

Use the number line.

Count on to find the sum.



1.	$\begin{array}{r} 6 \\ + 3 \\ \hline \end{array}$	2.	$\begin{array}{r} 3 \\ + 2 \\ \hline \end{array}$	3.	$\begin{array}{r} 5 \\ + 2 \\ \hline \end{array}$	4.	$\begin{array}{r} 7 \\ + 1 \\ \hline \end{array}$	5.	$\begin{array}{r} 4 \\ + 2 \\ \hline \end{array}$
----	---	----	---	----	---	----	---	----	---

6.	$\begin{array}{r} 7 \\ + 3 \\ \hline \end{array}$	7.	$\begin{array}{r} 6 \\ + 2 \\ \hline \end{array}$	8.	$\begin{array}{r} 8 \\ + 2 \\ \hline \end{array}$	9.	$\begin{array}{r} 1 \\ + 2 \\ \hline \end{array}$	10.	$\begin{array}{r} 4 \\ + 1 \\ \hline \end{array}$
----	---	----	---	----	---	----	---	-----	---

11.	$\begin{array}{r} 4 \\ + 3 \\ \hline \end{array}$	12.	$\begin{array}{r} 8 \\ + 1 \\ \hline \end{array}$	13.	$\begin{array}{r} 7 \\ + 2 \\ \hline \end{array}$	14.	$\begin{array}{r} 5 \\ + 3 \\ \hline \end{array}$	15.	$\begin{array}{r} 3 \\ + 1 \\ \hline \end{array}$
-----	---	-----	---	-----	---	-----	---	-----	---

► **Mixed Review**

Write the missing number.

16. 2, 3, _____, 5

17. 7, 8, 9, _____

18. _____, 5, 6, 7

19. 3, 4, _____, 6, 7