

Name \_\_\_\_\_

Day 5



Read the text 3 times. Color a star after each time you read.

## Ana's Teddy Bear



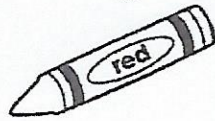
Ana loves her little teddy bear! She got it for her birthday from her grandma. The teddy bear is yellow and fluffy with big black eyes. Ana plays with him every day. She reads him books, she dresses him up, she even takes him for a walk in a little pink stroller.

One day Ana lost her teddy bear at the park. She was very upset because she couldn't find him. Her mom helped her look for him. The teddy bear was not in his little stroller. He was not on the grass. He was not on the swings. They found him on top of the green slide.

Answer the questions and color the evidence in the text.

1. Who gave Ana a teddy bear?

her mom

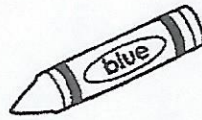


her grandma

2. Where did Ana find her lost teddy bear?

on the green slide

on the green swing



3. Describe Ana's teddy bear.



\_\_\_\_\_

-----



\_\_\_\_\_

-----

\_\_\_\_\_

## Algebra • Related Addition and Subtraction Facts

Circle the related facts in each row.



1.  $4 + 3 = \underline{7}$

$3 + 3 = \underline{6}$

$7 - 3 = \underline{4}$

2.  $8 + 3 = \underline{\quad}$

$11 - 3 = \underline{\quad}$

$7 + 4 = \underline{\quad}$

3.  $6 + 4 = \underline{\quad}$

$6 - 4 = \underline{\quad}$

$10 - 4 = \underline{\quad}$

4.  $7 + 5 = \underline{\quad}$

$3 + 9 = \underline{\quad}$

$12 - 9 = \underline{\quad}$

5.  $4 + 8 = \underline{\quad}$

$5 + 6 = \underline{\quad}$

$11 - 6 = \underline{\quad}$

6.  $2 + 9 = \underline{\quad}$

$11 - 9 = \underline{\quad}$

$11 - 4 = \underline{\quad}$

### ► Mixed Review

Solve.

7.  $10 - 8 = \underline{\quad}$

$9 + 2 = \underline{\quad}$

$9 - 5 = \underline{\quad}$

8.  $11 - 8 = \underline{\quad}$

$7 + 3 = \underline{\quad}$

$7 - 2 = \underline{\quad}$

9.  $10 - 4 = \underline{\quad}$

$8 + 2 = \underline{\quad}$

$12 - 6 = \underline{\quad}$

Name \_\_\_\_\_

Day 5

**What if you could put anything in your backpack?**



Handwriting practice lines consisting of multiple sets of three horizontal lines: a solid top line, a dashed middle line, and a solid bottom line.

Name \_\_\_\_\_

Day  
5

Weekly Question

Can a rock grow?




1. Color the picture of a living thing.

Teddy Bear



Big Bear



2. Look at the bears again. Circle yes or no.

Teddy Bear grows.                      yes      no

Big Bear is living.                      yes      no

Big Bear eats.                              yes      no

3. Complete the sentences. Use the words in the box.

living      nonliving      survive

A rock is \_\_\_\_\_.

A butterfly is \_\_\_\_\_.

I need air, water, and food to \_\_\_\_\_.