

Name: \_\_\_\_\_

Day 2

# Multiplication Arrays


Write the multiplication fact shown by each array.

example




$2 \times 5 = 10$

a.




\_\_\_\_\_

b.




\_\_\_\_\_

c.



\_\_\_\_\_

d.




\_\_\_\_\_

e.



\_\_\_\_\_

f.




\_\_\_\_\_

g.




\_\_\_\_\_

h.




\_\_\_\_\_

i.



\_\_\_\_\_

j.



\_\_\_\_\_

k.



\_\_\_\_\_