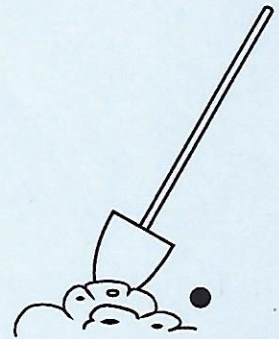
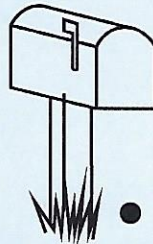



Name: _____

Day 5

Using a Map Scale



Scale: 1 inch = 10 feet

Use the scale on the map and the ruler at the bottom of the page to answer the distance questions below. Be sure to measure from the center of the first ● to the center of the second ●.

1. How far is it from the soccer ball to the mailbox? _____
2. How far is it from the bike to the flower? _____
3. How far is the apple tree from the soccer ball? _____
4. How many feet is it from the soccer ball to the flower? _____
5. How many feet is it from the bike to the soccer ball? _____
6. How far is the flower from the shovel, then from the shovel to the apple tree? _____

